

Total Questions : 50

Time : 1 hr.

PATTERN & MARKING SCHEME

Section	(1) General Awareness	(2) Current Affairs	(3) Life Skills	(4) Achievers Section
No. of Questions	30	10	5	5
Marks per Ques.	1	1	1	3

SYLLABUS





Our Body and Health, Plants and Animals, India and the World, Science and Technology, Environment and its Conservation, Language and Literature, Entertainment, Sports, Maths Fun, Life Skills (Moral Values, Flexibility, Emotional Intelligence, Decision Making, Team Work, Leadership, Time Management), Current Affairs .

Achievers Section : Higher Order Thinking Questions from the above given Syllabus.

1. Which of the following diseases is characterised by reduced bone density and an increased risk of fractures?

- (A) Marasmus (B) Kwashiorkor
(C) Osteoporosis (D) Hyponatremia

2. Whose birthday is observed as the 'International Day of Non-violence'?

- (A)  (B)  (C)  (D) 
- Nelson Mandela Mahatma Gandhi Mother Teresa Rabindranath Tagore





3. Which dance form of Kerala is known for its elaborate make-up and costumes?

- (A) Kuchipudi (B) Kathakali
(C) Odissi (D) Bharatanatyam

4. Which type of simple machine is a doorknob?

- (A) Lever (B) Pulley
(C) Wheel and axle (D) Screw

5. Who among the following is a famous sarod player?


- (A)  (B)  (C)  (D) 
- Amjad Ali Khan Zakir Hussain Ustad Bismillah Khan Pandit Ravi Shankar

6. Complete the given analogy by selecting the correct option.
 Acrophobia : Fear of heights :: Claustrophobia : _____
 (A) Fear of darkness (B) Fear of closed spaces
 (C) Fear of germs (D) Fear of ghosts


7. Who is the current Prime Minister of Thailand?



Paetongtarn
Shinawatra



Ibrahim
Mohamed Solih



Fumio Kishida

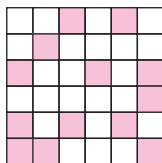
(D) None of these

8. Which of these is not a good listening skill?
 (A) Interrupting the speaker
 (B) Paying attention to the speaker
 (C) Facing the speaker and having eye contact with him/her
 (D) All of these

ACHIEVERS SECTION

9. What is the least number of squares that must be shaded so that the given figure has exactly one line of symmetry?

- (A) 6
 (B) 7
 (C) 5
 (D) None of these



10. Which of the following cannot be found in the given word grid?

- (A) A game played on horseback between two teams of four players each
 (B) A combat sport which involves fighting with fists
 (C) A popular cue sport played with 22 balls
 (D) None of these

R	I	T	P	B	C	F	O
A	P	P	O	R	H	B	C
C	R	I	L	O	E	O	K
K	A	N	O	L	S	X	E
B	A	N	D	Y	S	I	Y
I	E	N	N	I	S	N	O
H	O	H	O	C	K	G	R
M	T	N	G	E	M	A	N

ANSWER KEY

1. (C) 2. (B) 3. (B) 4. (C) 5. (A) 6. (B) 7. (A) 8. (A) 9. (C) 10. (C)