

Total Questions : 35

Time : 1 hr.

### PATTERN & MARKING SCHEME

Section	(1) General Awareness	(2) Current Affairs	(3) Life Skills	(4) Achievers Section
No. of Questions	20	5	5	5
Marks per Ques.	1	1	1	2

### SYLLABUS

Me and My Surroundings, Plants and Animals, India and the World, Science and Technology, Language and Literature, Earth and Its Environment, Transport and Communication, Sports, Maths Fun, Life Skills (Social Skills, Moral Values, Team Work, Communication), Current Affairs.

**Achievers Section :** Higher Order Thinking Questions from the above given Syllabus.

1. How many teeth does an adult human being have?

- (A) 20                      (B) 28                      (C) 32                      (D) 44

2. Which of the following is a seed-eating bird?

- (A)                       (B)                       (C)                       (D) All of these

3. In which country would you find the Great Pyramid and the Great Sphinx of Giza?



- (A) Iran                      (B) Iraq                      (C) Saudi Arabia                      (D) Egypt

4. Which of the following appliances is NOT used in kitchen?

- (A)                       (B)                       (C)                       (D) None of these

5. Select the word with the correct spelling.


- (A) Forain                      (B) Foreign                      (C) Fareign                      (D) Foraigin


6. Which of the following games is played with a 'club'?
- (A) Tennis (B) Golf (C) Ice skating (D) Soccer
7. Who is the current Director General of the World Health Organisation (WHO)?
- (A) Tedros A. Ghebreyesus (B) Raghuram Rajan  
(C) Antonio Guterres (D) None of these
8. You should NOT talk to your friends about personal things \_\_\_\_\_.  
(A) Before school  
(B) During your class when the teacher is teaching  
(C) After school  
(D) During the lunch break


### ACHIEVERS SECTION

9. Unscramble the given letters to find the name of a partly enclosed coastal water body where fresh water from rivers and streams mixes with salt water from the ocean.
- (A) ATYUESR (B) OLAONG  
(C) YAB (D) MAREST
10. Which of the following are NOT matched correctly?

1.  – Stem of a plant

2.  – Leaf of palm tree

3.  – Fruit of a plant

4.  – Leaf of papaya plant

(A) 1, 2 and 3 only  
(C) 3 and 4 only

(B) 2, 3 and 4 only  
(D) 1 and 4 only

### ANSWER KEY

1. (C) 2. (A) 3. (D) 4. (D) 5. (B) 6. (B) 7. (A) 8. (B) 9. (A) 10. (B)