

PATTERN & MARKING SCHEME		
Section	(1) Social Studies	(2) Achievers Section
No. of Questions	30	5
Marks per Ques.	1	2







Scan the QR code for more details

SYLLABUS

Section – 1 : Our Country – Physical and Political Divisions, India – Resources and Climate, Our Rich Heritage, People Who Made a Difference, Our Constitution and Government, Our History, Earth and Environment, Transport and Communication

Section – 2 : Higher Order Thinking Questions - Syllabus as per Section – 1.

- _____ is a string instrument.
(A) Tabla (B) Santoor (C) Trumpet (D) Flute
- Where did the dance form Mohiniyattam develop?
(A) Uttar Pradesh (B) Maharashtra (C) Kerala (D) Odisha
- He founded a monotheistic religion of Persia more than 3000 years ago in ancient Iran. Who is he?
(A) Jesus Christ (B) Freni (C) Zoroaster (D) Manu
- Select the correct match.
(A)  – School ahead (B)  – U-turn prohibited
(C)  – Roundabout (D)  – Men at work
- Water on Earth comes mainly from which of the following?
(A) Taps (B) Rain (C) Wells (D) None of these
- Which of the following causes air pollution?
(A) Burning leaves (B) Traffic noise (C) Sewage (D) All of these
- Roshani is living in Canada. Her friend Sanya is living in Gujarat. Which of the following is NOT a useful means of communication between them?
(A) Inland letters (B) Telephone (C) E-mail (D) Aerogrammes
- Which of the following is the largest plateau in India?
(A) Malwa Plateau (B) Chota Nagpur Plateau
(C) Deccan Plateau (D) None of these

ACHIEVERS SECTION

- Select the correct match.

Dance form	State
(A) Bihu	– Assam
(B) Bharatanatyam	– Tamil Nadu
(C) Garba	– Gujarat
(D) All of these	

10. Which of the following options on unscrambling gives the name of a river flowing from East to West?
- (A) IREVAK (B) RMNAADA
(C) SHANIRK (D) AHAMDINA

SPACE FOR ROUGH WORK

ANSWERS

ISSO – 1. (B) 2. (C) 3. (C) 4. (A) 5. (B) 6. (A) 7. (A) 8. (C) 9. (D) 10. (B)