

PATTERN & MARKING SCHEME

Section	(1) General Awareness	(2) Current Affairs	(3) Life Skills	(4) Achievers Section
No. of Questions	20	5	5	5
Marks per Ques.	1	1	1	2

SYLLABUS

Me and My Surroundings, Plants and Animals, India and the World, Science and Technology, Language and Literature, Earth and Its Environment, Transport and Communication, Sports, Maths Fun, Life Skills (Moral Values, Team Work, Environmental Sensitivity, Communication, Leadership, Time Management), Current Affairs.

Achievers Section : Higher Order Thinking Questions from the above given Syllabus.

1. Select the country where the landmark shown in the picture is situated.

- (A) China (B) U.S.A.
(C) U.A.E. (D) France



2. Read the given statement carefully and select the correct option.

We eat the stem of plant X. X could be

- (A)  (B)  (C)  (D) 

3. Alexander Graham Bell invented _____.

- (A)  (B)  (C)  (D) 

4. Identify the name of the device shown in the picture.

- (A) Windmill (B) Solar panel
(C) Elevator (D) Radar



5. 'Ashoka Chakra' which has _____ spokes, is imprinted on Indian National Flag.





- (A) 21 (B) 26 (C) 24 (D) 28

6. The place where you generally see the given sign board is _____.

- (A) Inside a house (B) In a zoo
(C) Near the Airport (D) Outside a post-office



7. Who among the following cricketers is also called 'Gabbar'?

- (A)  (B)  (C)  (D) 
- Sachin Tendulkar Virat Kohli Shikhar Dhawan Gautam Gambhir

8. Which of the following is NOT situated in Delhi?
(A) Taj Mahal (B) Jama Masjid (C) Qutub Minar (D) Red Fort

ACHIEVERS SECTION

9. Select the correct match.
(A) Martyr's Day - 30th January (B) World Environment Day - 5th July
(C) National Science Day - 28th March (D) Republic Day - 15th August

10. Name of the asana shown here is _____.
(A) Bhadrasana
(B) Vajrasana
(C) Surya namaskar
(D) Siddhasana



SPACE FOR ROUGH WORK

ANSWERS

1. (D) 2. (A) 3. (A) 4. (B) 5. (C) 6. (C) 7. (C) 8. (A) 9. (A) 10. (A)